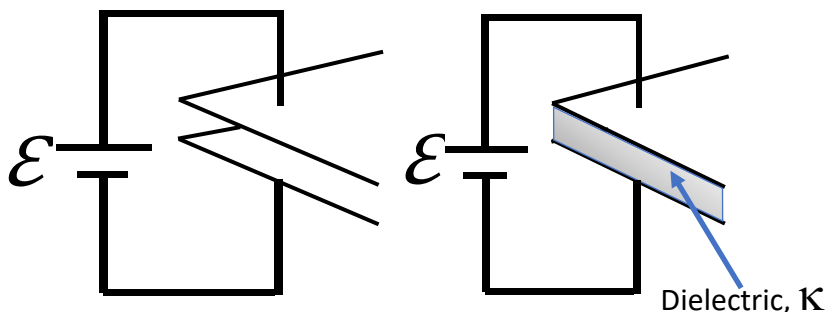


Physics 207 – Exam 2

Sections (207-212, 543-583) – October 14th, 2021

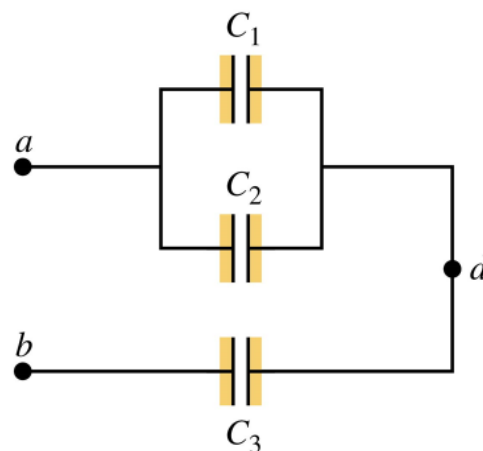
- 1) [10 pts] A parallel-plate capacitor C is connected to a battery of emf \mathcal{E} . You slide between its plates a slab of dielectric with dielectric constant κ , completely filling the space between its plates. If the initial charge is Q and the initial stored energy is U , what are the charge and energy after the dielectric has been slid into place and the system is in equilibrium?

- A. $\kappa Q, U/\kappa$
- B. $\kappa Q, \kappa U$
- C. $Q/\kappa, \kappa U$
- D. $Q/\kappa, U/\kappa$
- E. $Q/\kappa, U/\kappa^2$
- F. $Q/\kappa, \kappa^2 U$
- G. $\kappa^2 Q, \kappa^2 U$



- 2) [6 pts] The three capacitors shown below have the same capacitance $C_1 = C_2 = C_3 = 3 \mu\text{F}$. The equivalent capacitance is

- A. $4.5 \mu\text{F}$
- B. $2.0 \mu\text{F}$
- C. $9.0 \mu\text{F}$
- D. $1.0 \mu\text{F}$
- E. $12.0 \mu\text{F}$
- F. $6.5 \mu\text{F}$

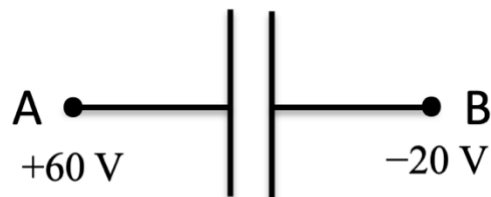


- 3) [10 pts] Consider the same capacitor network as in the previous problem. If we apply $V_a = 3 \text{ V}$ and $V_b = -15 \text{ V}$, find the charge on the *first* and on the *third* capacitor:

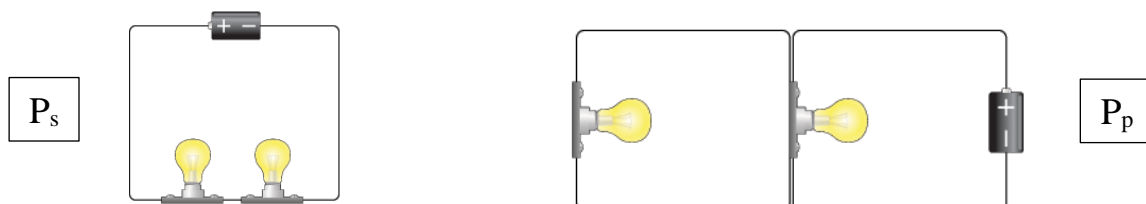
- A. $40.5 \mu\text{C}, 81.0 \mu\text{C}$
- B. $26.0 \mu\text{C}, 42.5 \mu\text{C}$
- C. $18.0 \mu\text{C}, 36.0 \mu\text{C}$
- D. $36.0 \mu\text{C}, 18.0 \mu\text{C}$
- E. $53.0 \mu\text{C}, 21.0 \mu\text{C}$
- F. $81.0 \mu\text{C}, 40.5 \mu\text{C}$

4) [10 pts] A 20 μF capacitor has plate A at +60 V and plate B at -20V. Find the charges on plates A and B.

- A. 1.2 mC, -0.4 mC
- B. -1.2 mC, 0.4 mC
- C. 1.6 mC, -1.6 mC
- D. -1.6 mC, 1.6 mC
- E. 0.8 mC, -0.8 mC,
- F. -0.4 mC, -1.2 mC.

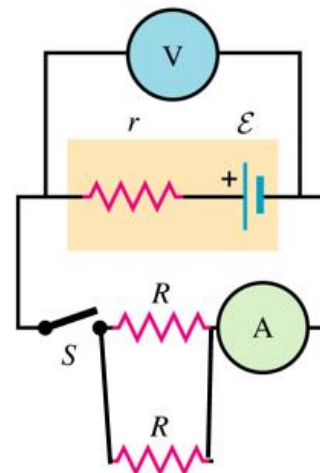


5) [8 pts] For identical light bulbs A and B, compare their total power output (A+B) when they are in parallel (p) and in series (s). That is, find P_p/P_s .



- A. $P_p/P_s = 4$
- B. $P_p/P_s = 2$
- C. $P_p/P_s = 1$
- D. $P_p/P_s = 0.75$
- E. $P_p/P_s = 0.5$
- F. $P_p/P_s = 0.25$

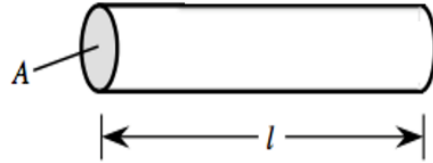
6) [10 pts] The circuit below contains a non-ideal battery with emf $\mathcal{E}=12\text{ V}$, and an internal resistance $r =2\ \Omega$. The battery is connected to the a circuit with a voltmeter, an ammeter, and two identical resistances of $R = 4\ \Omega$. The voltmeter and ammeter are ideal. In terms of the quantities given what are the readings of the voltmeter before the switch is closed (V_0) and of the ammeter after the switch is closed (I_1)?



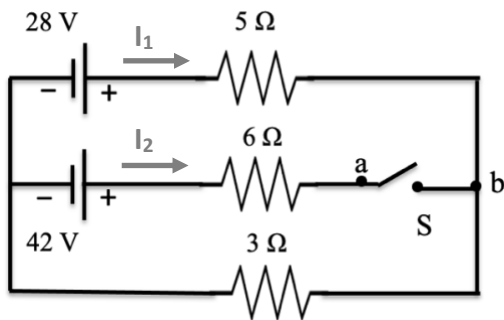
- A. $V_0=6\text{ V}$, $I_1=1.2\text{ A}$
- B. $V_0=0\text{ V}$, $I_1=2\text{ A}$
- C. $V_0=6\text{ V}$, $I_1=2\text{ A}$
- D. $V_0=12\text{ V}$, $I_1=3\text{ A}$
- E. $V_0=12\text{ V}$, $I_1=0\text{ A}$
- F. $V_0=0\text{ V}$, $I_1=3\text{ A}$

- 7) [8 pts] Consider a wire of area $A=4 \text{ mm}^2$ and length $l=3 \text{ m}$. If a voltage difference of 4.5 V is applied to its ends, then a current of 2 A flows through it. Find the resistivity ρ .

- A. $3.0 \times 10^{-3} \Omega\text{-m}$
- B. $6.0 \times 10^{-6} \Omega/\text{m}$
- C. $9.0 \times 10^{-9} \Omega/\text{m}$
- D. $3.0 \times 10^{-6} \Omega/\text{m}$
- E. $3.0 \times 10^{-6} \Omega\text{-m}$
- F. $2.0 \times 10^{-9} \Omega\text{-m}$



- 8) [10 pts] For the DC circuit shown below the switch S is open. The current through the 28V battery and the voltage difference V_{ab} between the contacts a and b of the open switch are

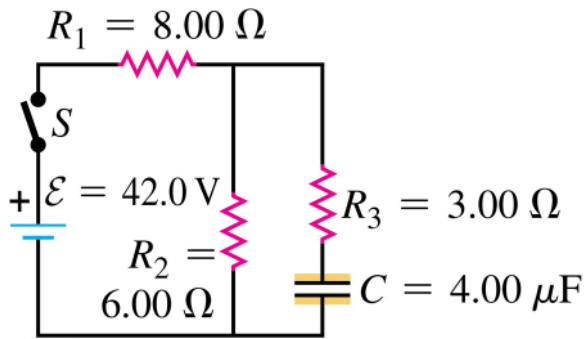


- A. $4.0 \text{ A}, -31.5 \text{ V}$
- B. $1.2 \text{ A}, 11.5 \text{ V}$
- C. $1.2 \text{ A}, -15 \text{ V}$
- D. $3.5 \text{ A}, 52.5 \text{ V}$
- E. $3.5 \text{ A}, 31.5 \text{ V}$
- F. $4.0 \text{ A}, 22 \text{ V}$

- 9) [8 pts] For the DC circuit above the switch S is now closed. Let rightward correspond to positive currents I_1 and I_2 through the 5Ω and 6Ω resistors. Taking a clockwise loop direction, the Kirchoff loop equation for the upper loop (containing both batteries) is:

- A. $28\text{V} - (5\Omega)I_1 - (6\Omega)I_2 + 42\text{V}=0$
- B. $-28\text{V} + (5\Omega)I_1 + (6\Omega)I_2 - 42\text{V}=0$
- C. $28\text{V} + (5\Omega)I_1 - (9\Omega)I_2 + 42\text{V}=0$
- D. $28\text{V} - (5\Omega)I_1 + (6\Omega)I_2 - 42\text{V}=0$
- E. $-28\text{V} + (5\Omega)I_1 + (6\Omega)I_2 - (3\Omega)(I_1 + I_2)=0$
- F. $28\text{V} + (5\Omega)I_1 - (3\Omega)(I_1 + I_2) + 42\text{V}=0$

- 10) [10 pts] The capacitor in the circuit shown below is initially uncharged. At $t = 0$ the switch is closed. The currents through the resistor R_1 initially ($t=0$) and after a very long time are:



- A. 3.0 A, 4.2 A
 B. 4.2 A, 2.0 A
 C. 2.0 A, 3.0 A
 D. 4.2 A, 3.0 A
 E. 5.2 A, 1.0 A
 F. 2.0 A, 5.2 A
- 11) [10 pts] In the previous problem after the switch had been closed for a long time the capacitor became fully charged at $72 \mu\text{C}$. The switch is now opened at the new initial time. (i) What is the initial current I_0 through resistor R_3 ? (ii) The capacitor initially stores an electrical energy U_0 . After the current has decreased to $I_0/3$ it stores an electrical energy U . What is U/U_0 ?
- A. 6.0 A, $1/3$
 B. 4.2 A, $1/6$
 C. 2.0 A, $1/9$
 D. 2.0 A, $2/3$
 E. 6.0 A, $1/9$
 F. 4.2 A, $5/6$

Scratch Paper