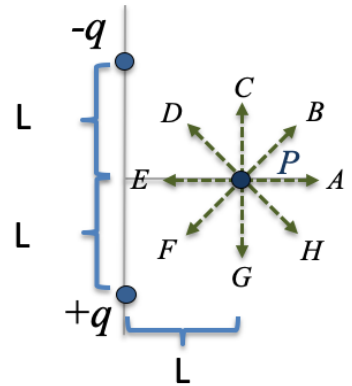


# Physics 207 – Exam 1

Sections (207-212, 543-583) – September 23<sup>rd</sup>, 2021

Right answer indicated by ←. Number of points indicated in parenthesis, zero otherwise

- 1) [7 pts] Point P is at 3 equal distance from two fixed point charges +q and -q as shown. If a **negative** point charge is placed on P, which dashed arrow on the figure shows the direction of the net electrical **force** felt by the charge at P due to the fixed charges?



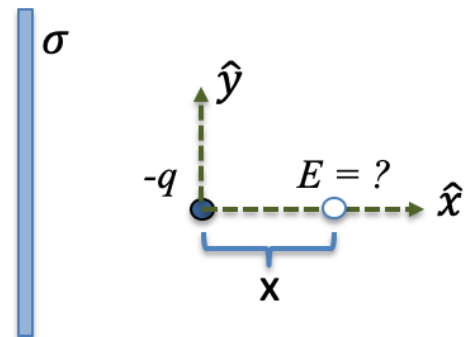
- |          |            |
|----------|------------|
| A. A (2) | E. E (2)   |
| B. B     | F. F       |
| C. C (4) | G. G (7) ← |
| D. D     | H. H       |

- 2) [8 pts] In the previous problem, if the charge at point P is -q, the magnitude of the force felt by that charge is :

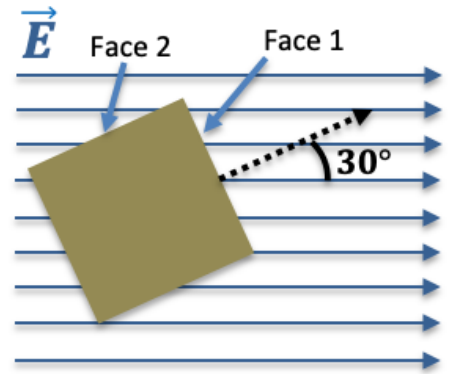
- A.  $\frac{2kq^2 L}{(2L^2)^{3/2}}$  (8) ←  
 B.  $\frac{kq^2 L}{(2L^2)^{3/2}}$  (6)  
 C.  $\frac{2kq^2 L}{(L^2)^{3/2}}$  (4)  
 D.  $\frac{2kq^2 L^2}{(2L^2)^3}$   
 E.  $\frac{kq^2 L}{(2L^2)^3}$   
 F.  $\frac{2kq^2 L}{(L^2)^3}$

- 3) [8 pts] A negative point charge -q is at the coordinate origin, at some distance from an infinitely long plate with uniform charge  $\sigma$  per unit area as shown in the picture. The electric field a distance x from the point charge as shown in the figure is:

- A.  $\left(\frac{\sigma}{2\epsilon_0} - k\frac{q}{x^2}\right) \hat{x}$  (8) ←  
 B.  $\left(\frac{\sigma}{2\epsilon_0} + k\frac{q}{x^2}\right) \hat{x}$  (4)  
 C.  $\left(-\frac{\sigma}{2\epsilon_0} - k\frac{q}{x^2}\right) \hat{x}$  (5)  
 D.  $\left(-\frac{\sigma}{2\epsilon_0} + k\frac{q}{x^2}\right) \hat{x}$  (2)  
 E.  $\left(\frac{\sigma}{2\epsilon_0} - k\frac{q}{x}\right) \hat{x}$  (3)  
 F.  $\left(\frac{\sigma}{2\epsilon_0} + k\frac{q}{x}\right) \hat{x}$  (3)  
 G.  $\left(-\frac{\sigma}{2\epsilon_0} - k\frac{q}{x}\right) \hat{x}$  (1)  
 H.  $\left(-\frac{\sigma}{2\epsilon_0} + k\frac{q}{x}\right) \hat{x}$  (1)

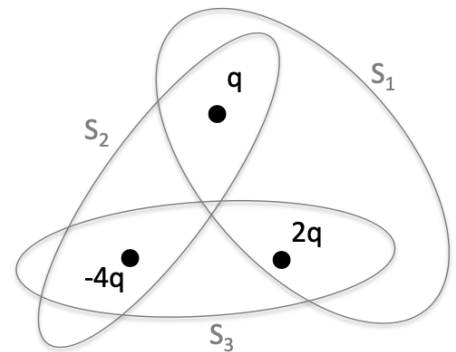


- 4) [8 pts] a cube of side  $L$  is tilted  $30$  degrees with respect to a homogenous external electric field of magnitude  $E$ . The flux through the faces 1 and 2 indicated in the picture are (face 1, face 2):



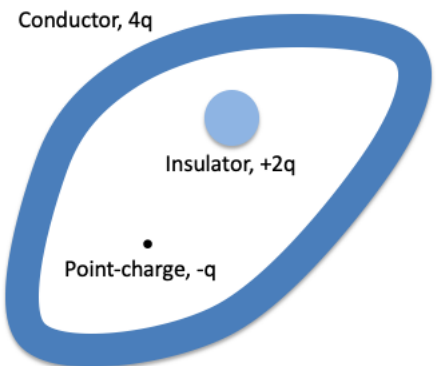
- A.  $EL^2 \cos(30), -EL^2 \sin(30)$  (8) ←  
 B.  $EL^2 \cos(30), -EL^2 \cos(30)$  (4)  
 C.  $EL^2 \sin(30), -EL^2 \sin(30)$  (4)  
 D.  $EL^2 \sin(30), -EL^2 \cos(30)$   
 E.  $-EL^2 \cos(30), EL^2 \sin(30)$  (2)  
 F.  $-EL^2 \cos(30), EL^2 \cos(30)$  (2)  
 G.  $-EL^2 \sin(30), EL^2 \sin(30)$  (2)  
 H.  $-EL^2 \sin(30), EL^2 \cos(30)$

- 5) [7 pts] Three Gaussian surfaces  $S_1, S_2, S_3$  are enclosing charges as shown. The flux enclosed by each corresponding surface can be ordered from the most positive to the most negative as:



- A.  $\Phi_1 > \Phi_2 > \Phi_3$  (4)  
 B.  $\Phi_1 > \Phi_3 > \Phi_2$  (7) ←  
 C.  $\Phi_2 > \Phi_3 > \Phi_1$   
 D.  $\Phi_2 > \Phi_1 > \Phi_3$  (4)  
 E.  $\Phi_3 > \Phi_1 > \Phi_2$  (4)  
 F.  $\Phi_3 > \Phi_2 > \Phi_1$

- 6) [7 pts] A closed hollow conductor with net charge  $4q$  encloses inside a point-like charge  $-q$ , and an insulator with charge  $2q$  as shown in the figure. Find the total charge distributed in the **outer surface** of the conductor:



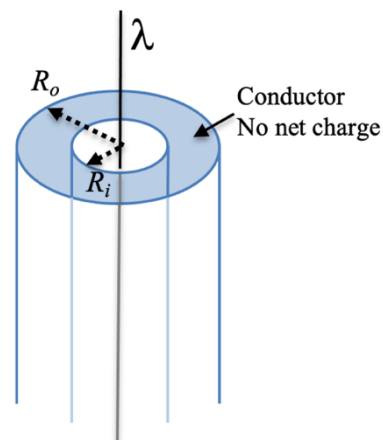
- A.  $-2q$   
 B.  $-1q$   
 C.  $0q$   
 D.  $1q$   
 E.  $2q$   
 F.  $3q$   
 G.  $4q$  (2)  
 H.  $5q$  (7) ←

- 7) [8 pts] Two thin concentric spherical shells have radii  $R_1$  and  $R_2$  with  $R_1 < R_2$ . A total charge of  $-2Q$  is uniformly spread in the inner shell and a total charge of  $Q$  is spread on the outer shell. The electric field in the region between the two shells, at  $R_1 < r < R_2$ , is

- A. pointing outward with magnitude  $kQ/r^2$  (2)  
 B. pointing inward with magnitude  $kQ/r^2$  (4)  
 C. pointing outward with magnitude  $k2Q/r^2$  (6)  
 D. pointing inward with magnitude  $k2Q/r^2$  (8) ←  
 E. pointing outward with magnitude  $kQ/r$   
 F. pointing inward with magnitude  $kQ/r$  (2)  
 G. pointing outward with magnitude  $k2Q/r$   
 H. pointing inward with magnitude  $k2Q/r$  (2)

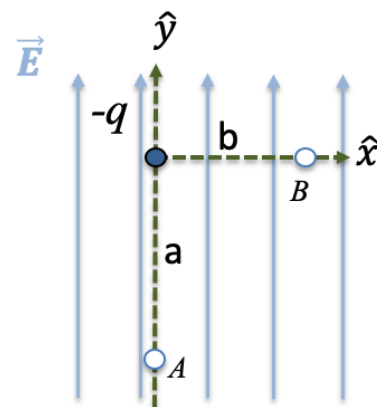
- 8) [8 pts ] A long string with charge density per unit length  $\lambda$ , is at the center of long hollow cylindrical conductor with no net charge, internal radius of  $R_i$  and external radius  $R_o$  as shown in the figure. The charge per unit area  $\sigma$  induced in the inner surface of the conductor is:

- A.  $\sigma = \frac{+\lambda}{2\pi R_i}$  (5)  
 B.  $\sigma = \frac{-\lambda}{2\pi R_i}$  (8) ←  
 C.  $\sigma = \frac{+\lambda}{\pi R_i}$  (2)  
 D.  $\sigma = \frac{-\lambda}{\pi R_i}$  (3)  
 E.  $\sigma = \frac{+\lambda}{2\pi R_i^2}$  (1)  
 F.  $\sigma = \frac{-\lambda}{2\pi R_i^2}$  (2)  
 G.  $\sigma = \frac{+\lambda}{\pi R_i^2}$  (1)  
 H.  $\sigma = \frac{-\lambda}{\pi(R_o^2 - R_i^2)}$



- 9) [8 pts] In a region of space there is a constant electric field of magnitude  $E_0$  in the Y direction, superimposed with the electric field of a point charge  $-q$  at the origin. Compute the difference in electric potential at points B and A,  $V_B - V_A$ , as located in the figure.

- A.  $+E_0 a + kq \frac{(a-b)}{ab}$  (3)  
 B.  $+E_0 a - kq \frac{(a-b)}{ab}$  (5)  
 C.  $-E_0 a + kq \frac{(a-b)}{ab}$  (4)  
 D.  $-E_0 a - kq \frac{(a-b)}{ab}$  (8) ←  
 E.  $+E_0 b + kq \frac{(a-b)}{ab}$  (2)  
 F.  $+E_0 b - kq \frac{(a-b)}{ab}$  (4)  
 G.  $-E_0 b + kq \frac{(a+b)}{ab}$   
 H.  $-E_0 b - kq \frac{(a+b)}{ab}$

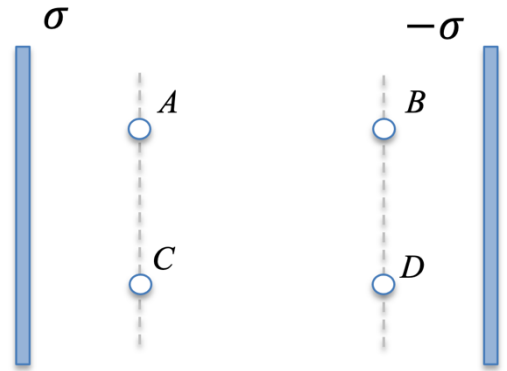


- 10) [8 pts] At locations A and B, the electric potential has the values  $V_A = 20$  V and  $V_B = -10$  V. A small particle with charge  $q = -2 \mu\text{C}$  is released from rest at one of the locations and passes through the other location with kinetic energy  $K$ . Which of the following statement is true?

- A. The other location is A with  $K = 20 \mu\text{J}$  (2)  
 B. The other location is A with  $K = 40 \mu\text{J}$  (2)  
 C. The other location is A with  $K = 60 \mu\text{J}$  (8) ←  
 D. The other location is A with  $K = 80 \mu\text{J}$  (2)  
 E. The other location is B with  $K = 20 \mu\text{J}$   
 F. The other location is B with  $K = 40 \mu\text{J}$   
 G. The other location is B with  $K = 60 \mu\text{J}$  (4)  
 H. The other location is B with  $K = 80 \mu\text{J}$

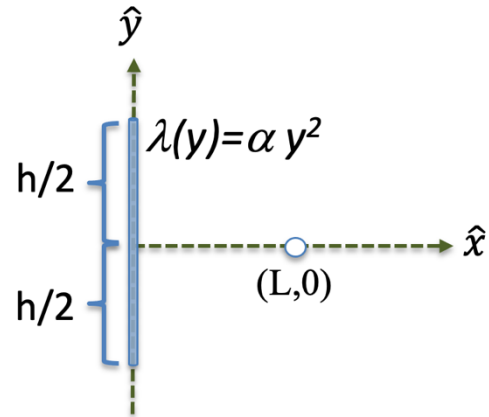
11) [7 pts] Two equal but opposite charged plates with uniformly distributed charges are as shown. Which of the following statement is **incorrect** ? [6 pts]

- A. Position A is at a higher potential than position B
- B. Position A is at a higher potential than position D
- C. Position C is at a higher potential than position A (7) ←
- D. Position C is at a higher potential than position B
- E. Position C is at a higher potential than position D



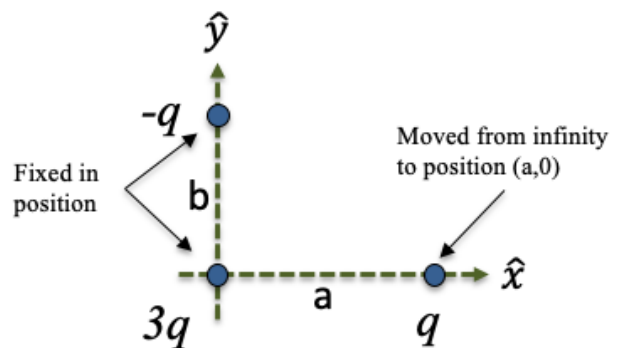
12) [8 pts] A short line of length **h** is centered at the origin, aligned with the y-axis and has a non-uniform linear charge density  $\lambda(y) = \alpha y^2$ , where  $\alpha$  is a known constant. The electric field produced by the charged line at the point (L,0) is given by :

- A.  $E_x(L, 0) = \int_{-h/2}^{h/2} \frac{k\alpha y^2 L dy}{(L^2 + y^2)^{3/2}}$  (8) ←
- B.  $E_x(L, 0) = \int_{-h/2}^{h/2} \frac{k\alpha y^3 dy}{(L^2 + y^2)^{3/2}}$  (6)
- C.  $E_x(L, 0) = \int_{-h/2}^{h/2} \frac{k\alpha y^2 dy}{(L^2 + y^2)}$  (4)
- D.  $E_x(L, 0) = \int_{-h/2}^{h/2} \frac{k\alpha y^2 L dy}{(L^2 + y^2)^3}$
- E.  $E_x(L, 0) = \int_{-h/2}^{h/2} \frac{k\alpha y^3 L^2 dy}{(L^2 + y^2)^3}$
- F.  $E_x(L, 0) = \int_{-h/2}^{h/2} \frac{k\alpha L^2 dy}{(L^2 + y^2)^3}$



13) [8 pts] A charge of value **3q** is fixed at the origin, and a charge **-q** is fixed at position (0,b). A third charge of value **q** is then moved from infinity to position (a,0) as shown in the figure. Assuming the potential of the third charge at infinity is zero, the work done **by the electric force** as the third charge is moved from infinity to its final position (a,0) is:

- A.  $+k \frac{3q^2}{a} + k \frac{q^2}{b}$
- B.  $-k \frac{3q^2}{a} + k \frac{q^2}{b}$  (4)
- C.  $+k \frac{3q^2}{a} - k \frac{q^2}{b}$
- D.  $-k \frac{3q^2}{a} - k \frac{q^2}{b}$  (4)
- E.  $+k \frac{3q^2}{a} + k \frac{q^2}{\sqrt{a^2 + b^2}}$  (4)
- F.  $-k \frac{3q^2}{a} + k \frac{q^2}{\sqrt{a^2 + b^2}}$  (8) ←
- G.  $+k \frac{3q^2}{a} - k \frac{q^2}{\sqrt{a^2 + b^2}}$  (2)
- H.  $-k \frac{3q^2}{a} - k \frac{q^2}{\sqrt{a^2 + b^2}}$  (4)



## Scratch Paper