

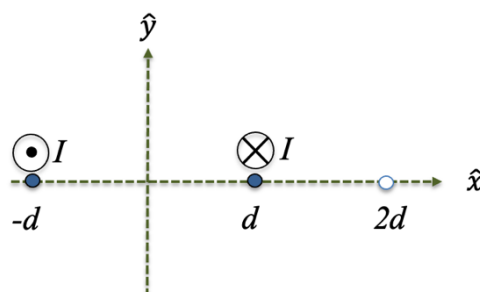
Physics 207 – Exam 3

Sections (207-212, 543-583) – November 11th, 2021

Right answer indicated by ←. Number of points indicated in parenthesis, zero otherwise

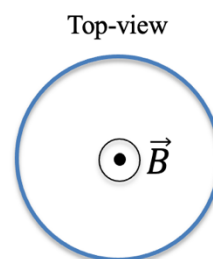
- 1) [10pts] Two long, straight wires are oriented perpendicular to the xy -plane. They carry currents of equal magnitude I in opposite directions as shown. At point P with the coordinates $(2d,0)$ the magnetic field due to these currents is equal to

- A. $\frac{\mu_0 I}{3\pi d}$ along positive y -direction. (5)
- B. $\frac{\mu_0 I}{3\pi d}$ along negative y -direction. (10) ←
- C. $\frac{2\mu_0 I}{3\pi d}$ along negative y -direction. (5)
- D. $\frac{3\mu_0 I}{4\pi d}$ along positive x -direction.
- E. $\frac{2\mu_0 I}{3\pi d}$ along positive x -direction
- F. $\frac{3\mu_0 I}{4\pi d}$ along negative x -direction.



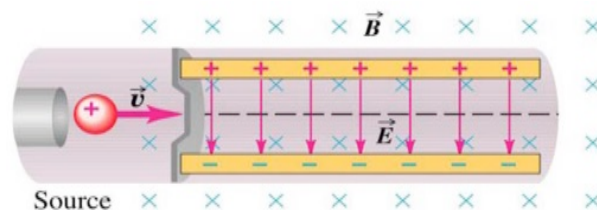
- 2) [8pts] The magnetic field through a loop is orthogonal to the plane of the loop as shown in the figure below. The magnitude of the field changes with time according to the relation $B(t) = 6 t^2 \text{ T/s}^2 + 7 t \text{ T/s} + 5 \text{ T}$. The area of the loop is 1 m^2 . As viewed from the top, the emf induced in the loop when $t = 2 \text{ s}$ is

- A. 38 V counterclockwise
- B. 38 V clockwise
- C. 31 V counterclockwise (4)
- D. 31 V clockwise (8) ←
- E. 19 V clockwise (4)
- F. 19V counterclockwise

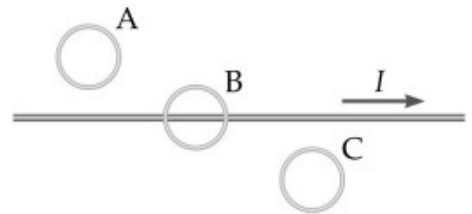


- 3) [8pts] A positively charged particle enters the region with crossed E and B as shown on the Figure. The speed of the particle is smaller than E/B . What are the directions of the magnetic force and the total force (magnetic and electric) acting on a particle?

- A. Up and down (8) ←
- B. Up and up (4)
- C. Into the page and out of the page
- D. Out of the page and out of the page
- E. Down and up
- F. Down and Down (4)

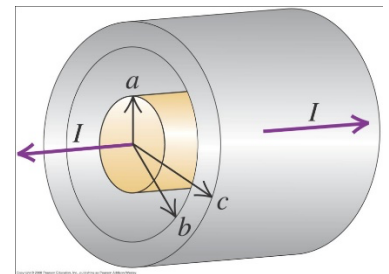


- 4) [8pts] The long straight wire in the figure carries a current I that is decreasing with time at a constant rate. The stationary circular loops A, B, and C all lie in a plane containing the wire. The induced emf in each of the loops A, B, and C is such that



- A. no emf is induced in any of the loops.
 B. a counterclockwise emf is induced in all the loops.
 C. A has a clockwise emf, B has no induced emf, and C has a counterclockwise emf. (4)
 D. A has a counter-clockwise emf, B has no induced emf, and C has a clockwise emf. (8) ←
 E. A has a counter-clockwise emf, B and C have clockwise emfs.
 F. A has a clockwise emf, B and C have a counter-clockwise emf. (4)

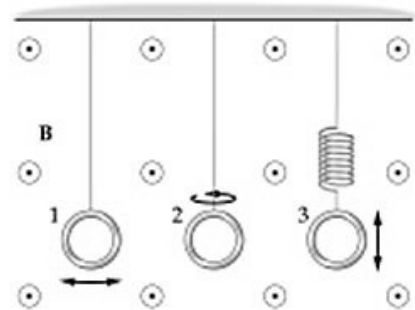
- 5) [8pts] A long solid cylindrical conductor with a radius a carries a current I as shown. It is surrounded by a concentric cylindrical shell with inner radius b and outer radius c carrying current I in the opposite direction. The magnetic field inside the shell ($b < r < c$) is given by



- A. 0
 B. $\frac{\mu_0 I}{2\pi r} \left(1 - \frac{r^2 - b^2}{c^2 - b^2}\right)$ and directed counter-clockwise (looking from left) (8) ←
 C. $\frac{\mu_0 I}{2\pi r} \left(1 + \frac{r^2 - b^2}{c^2 - b^2}\right)$ and directed counter-clockwise (looking from left) (4)
 D. $\frac{\mu_0 I}{2\pi r} \left(1 - \frac{r^2 - b^2}{c^2 - b^2}\right)$ and directed clockwise (looking from left) (4)
 E. $\frac{\mu_0 I}{2\pi r} \left(1 + \frac{r^2 - b^2}{c^2 - b^2}\right)$ and directed clockwise (looking from left)
 F. $\frac{\mu_0 I}{2\pi r} \left(1 + \frac{r^2 - b^2}{c^2 - a^2}\right)$ and directed clockwise (looking from left)

- 6) [8pts] The three loops of wire shown in the figure are all subject to the same uniform magnetic field \mathbf{B} that is constant in time. Loop 1 swings back and forth as the bob in a pendulum, loop 2 rotates about a vertical axis, and loop 3 oscillates up and down at the end of a spring. Which loop, or loops, will have an induced circulating current in them?

- A. loop 1 only
 B. loop 2 only (8) ←
 C. loop 3 only
 D. loops 1 and 2 (4)
 E. loops 2 and 3 (4)
 F. loops 1 and 3

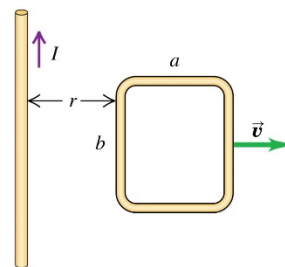


7) [8pts] A particle of charge q and mass m is moving with a velocity v along the x -axis in a magnetic field B which is along the z -axis. How much time will it take for the particle to return to its original location?

- A. $t = \frac{2\pi qB}{m}$
 B. $t = \frac{m}{qB}$ (4)
 C. $t = \frac{2\pi m}{qB}$ (8) ←
 D. $t = \frac{qB}{m}$
 E. $t = \frac{qB}{2\pi m}$
 F. It will never return to its original location

8) [10pts] A loop of wire is being moved to the right at constant velocity v , so that $r = vt$. A constant current I flows in the long straight wire as shown. Find the magnitude and direction of the current induced in the loop with resistance R and sides a and b (see figure).

- A. $\mu_0 Iab/[2\pi Rt(vt + a)]$ clockwise (10) ←
 B. $\mu_0 Iab/[2\pi Rt(vt + a)]$ counter clockwise (5)
 C. $\mu_0 Iab/[2\pi Rt(vt + b)]$ clockwise (5)
 D. no current is induced
 E. $\mu_0 Iab/[2\pi Rt(vt + b)]$ counter clockwise
 F. $\mu_0 I^2 ab/[2\pi Rt(vt + b)]$ counter clockwise

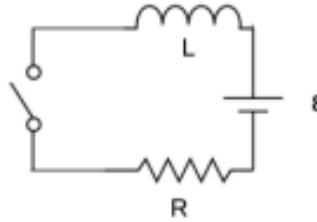


9) [8pts] The loop of wire in the previous figure is now stationary and a clockwise current I_1 flows in it. The total magnetic force produced by the long wire on the loop is:

- A. $\mu_0 II_1 ab/[2\pi r(r + a)]$ to the left (8) ←
 B. $\mu_0 II_1 ab/[2\pi r(r + a)]$ to the right (4)
 C. $\mu_0 II_1 ab \ln(1 + a/r)/2\pi$ up
 D. $\mu_0 II_1 ab \ln(1 + a/r)/2\pi$ down
 E. $\mu_0 II_1 ab/[2\pi r(r + b)]$ to the left (4)
 F. $\mu_0 II_1 ab/[2\pi r(r + b)]$ to the right

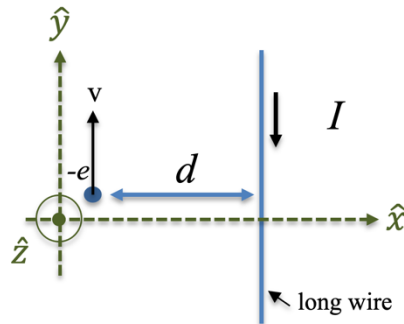
10) [8pts] An RL circuit is connected to a source of EMF through a switch ($L = 2.0 \text{ mH}$, $R = 100 \Omega$, $\mathcal{E} = 50 \text{ V}$). What are the characteristic time constant for this circuit and the energy stored in the inductor after the switch has been closed for a long time?

- A. 0.2s and 635kJ (2)
- B. 20 μs and 0.25mJ (8) ←
- C. 20 μs and 635kJ (4)
- D. 0.2s and 0.25mJ (4)
- E. 8s and 32.2 J
- F. 8 ms and 322 J



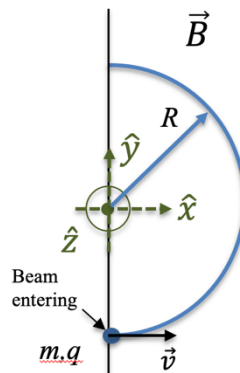
11) [8pts] An electron moves with velocity v in a direction opposite to the direction of the current in the neighboring long wire. What is the direction of the magnetic force acting on the electron?

- A. x (8) ←
- B. $-x$ (4)
- C. z
- D. $-z$
- E. y
- F. $-y$



12) [8pts] A horizontal beam of negatively charged particles with a charge $q = -10^{-9} \text{ C}$ and mass $m = 2 \times 10^{-12} \text{ kg}$ enters a region of a uniform magnetic field with a speed 200 m/s and is bent into a semicircle of radius 1 m. The magnitude and the direction of the magnetic field are:

- A. 1T in y direction
- B. 0.4T in $-z$ direction (4)
- C. 0.4T in z direction (8) ←
- D. 20T in z direction (4)
- E. 1T in $-y$ direction
- F. 20T in y direction



Scratch Paper